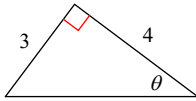


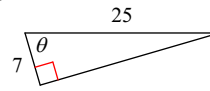
Trig Review - Spybot Prep

Find the value of the trig function indicated.

1) $\sin \theta$

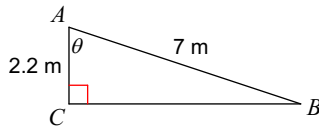


2) $\tan \theta$

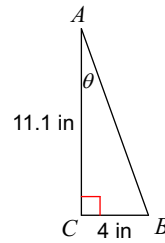


Find the measure of each angle indicated. Round to the nearest tenth.

3)

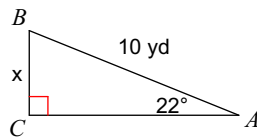


4)

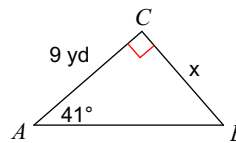


Find the measure of each side indicated. Round to the nearest tenth.

5)

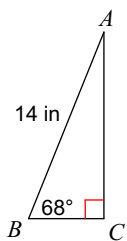


6)



Solve each triangle. Round answers to the nearest tenth.

7)



8)

